

Home
Learning
Pack

KSI



2

HUNDRED SQUARE

1	2	3	4	5	6	7	8	9	10
11	12	13	14	15	16	17	18	19	20
21	22	23	24	25	26	27	28	29	30
31	32	33	34	35	36	37	38	39	40
41	42	43	44	45	46	47	48	49	50
51	52	53	54	55	56	57	58	59	60
61	62	63	64	65	66	67	68	69	70
71	72	73	74	75	76	77	78	79	80
81	82	83	84	85	86	87	88	89	90
91	92	93	94	95	96	97	98	99	100

Maths Warm up! Bonds to 10! 10 every time!

$1 + \square = 10$

$2 + \square = 10$

$5 + \square = 10$

$0 + \square = 10$

$3 + \square = 10$

$12 - \square = 10$

$\square + 4 = 10$

$20 - \square = 10$

How many other ways can you make ten?

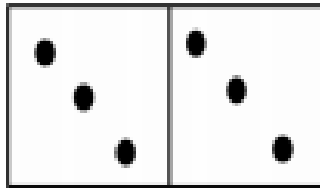
?

10

?


DOUBLE IT!

L1: I can double and half numbers to 12 and multiples of 10 to 100



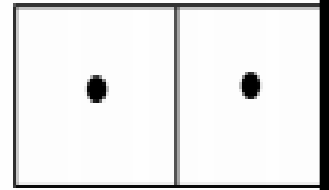
Double 3 = _____

Half of 6 = _____




Double 4 = _____

Half of 8 = _____




Double 1 = _____

Half of 2 = _____




Double 5 = _____

Half of 10 = _____



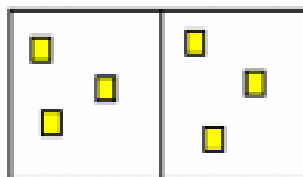
Double 6 = _____

Half of 12 = _____



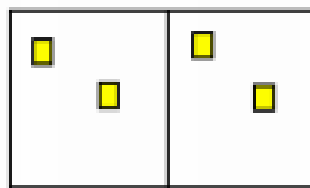
Double 2 = _____

Half of 4 = _____



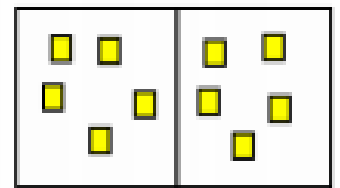
$3 \times 2 =$ _____

$6 + 2 =$ _____



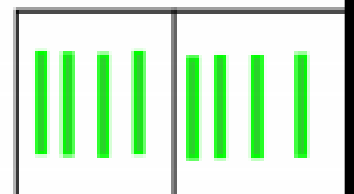
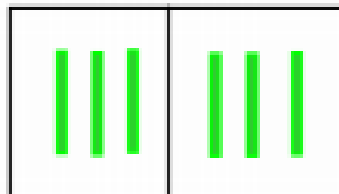

$2 \times 2 =$ _____

$4 + 2 =$ _____



$5 \times 2 =$ _____

$10 + 2 =$ _____



Count along the number line:

ADDITION CHALLENGE!



TAKE AWAY TIME

$$18 - 2 =$$


$$11 - 3 =$$

$$12 - 2 =$$

$$28 - 7 =$$

$$20 - 5 =$$

$$15 - 5 =$$



$$15 - 10 =$$

$$26 - 10 =$$

$$20 - 10 =$$

$$31 - 10 =$$

$$52 - 20 =$$

$$45 - 30 =$$

$$50 - 40 =$$



$$7 - 6 =$$

$$4 - \underline{\underline{3}} =$$

$$11 - 10 =$$

$$15 - 15 =$$

$$10 - 9 =$$

$$22 - 21 =$$

$$25 - 24 =$$



ADDITION CHALLENGE

Find a Total! Addition Calculations.

Mrs Underwood's Shop

2p



5p



10p














































20p



50p



      	      	      	      	      	       
--	--	--	---	--	---

TIMES TABLE SUPER CHALLENGE



$2 \times 2 =$	$3 \times 5 =$	$3 \times 10 =$
$3 \times 2 =$	$2 \times 5 =$	$8 \times 10 =$
$10 \times 2 =$	$6 \times 5 =$	$0 \times 10 =$
$1 \times 2 =$	$7 \times 5 =$	$11 \times 10 =$
$7 \times 2 =$	$1 \times 5 =$	$6 \times 10 =$
$0 \times 2 =$	$0 \times 5 =$	$4 \times 10 =$
$11 \times 2 =$	$10 \times 5 =$	$9 \times 10 =$
$12 \times 2 =$	$8 \times 5 =$	$12 \times 10 =$
$4 \times 2 =$	$4 \times 5 =$	$1 \times 10 =$
$5 \times 2 =$	$11 \times 5 =$	$5 \times 10 =$
$6 \times 2 =$	$5 \times 5 =$	$7 \times 10 =$
$8 \times 2 =$	$9 \times 5 =$	$2 \times 10 =$

Can you write more words for each sound?



Handwriting practice lines for the 'qu' sound. The area contains seven horizontal blue lines for writing.

Handwriting practice lines for the 'ng' sound. The area contains seven horizontal blue lines for writing.



Handwriting practice lines for the 'oi' sound. The area contains seven horizontal blue lines for writing.

Handwriting practice lines for the 'oa' sound. The area contains seven horizontal blue lines for writing.

Write a list of fruits and a list of vegetables! How many do you know?

Handwriting practice area with 15 horizontal blue lines.

Handwriting practice area with 15 horizontal blue lines.




Where in the world would you go? Write a postcard pretending you are somewhere amazing!

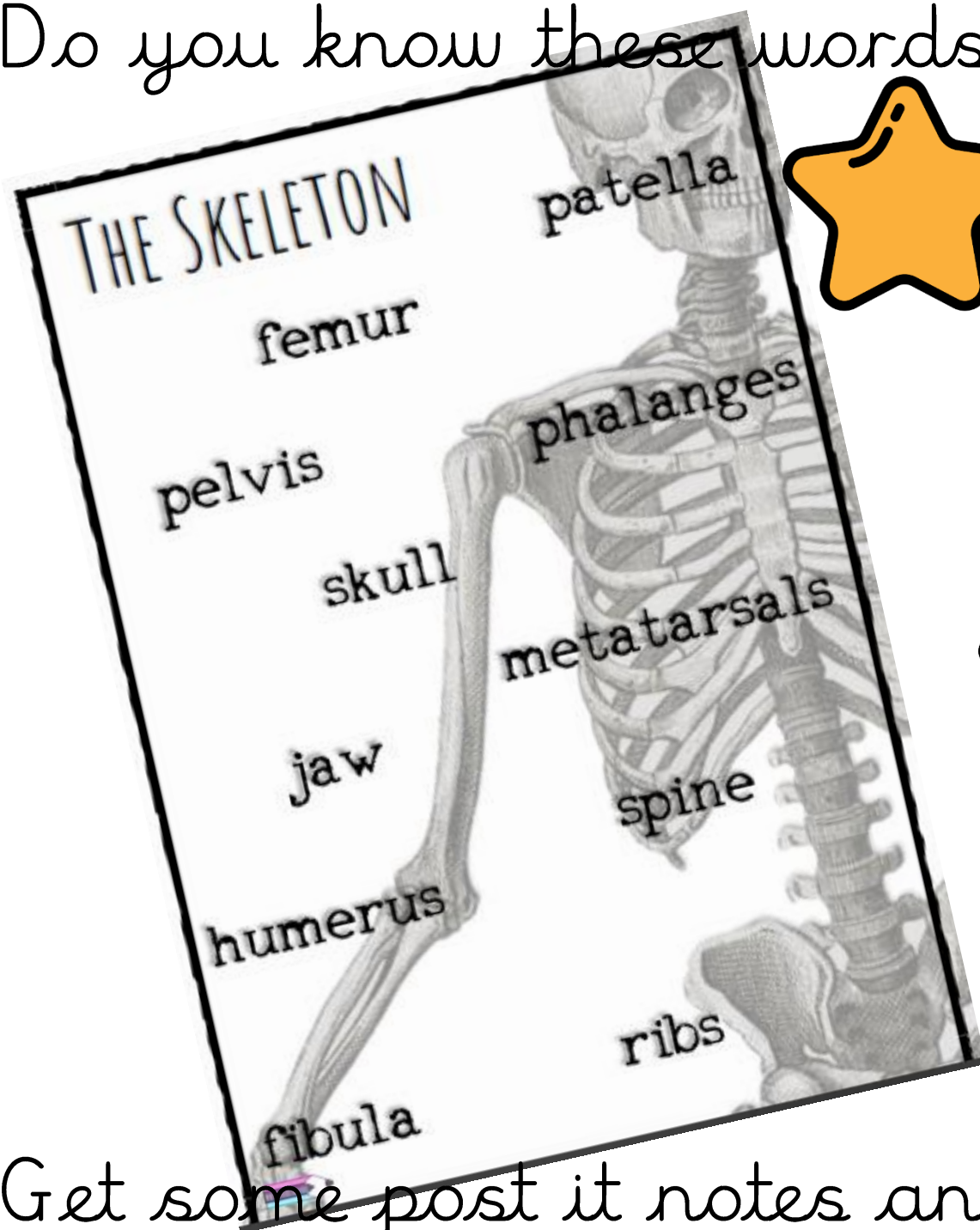


A large rectangular area divided into two sections by a vertical line. The left section contains 10 horizontal lines for writing. The right section contains 5 horizontal lines for writing.

Can you write a letter to your teacher? Tell them what you have been doing at home! What home learning have you enjoyed? Have you got any new hobbies?



Do you know these words?



Get some post it notes and create some labels! Stick them on your body in the right place! Then label the skeleton.

THE SKELETON

I can label the skeleton using the correct scientific vocabulary



You are amazing! 

Stronger than you know.

We miss you at school but know
it's the right thing to do right
now...

Keep trying hard.

Keep doing your best!

Keep being YOU!

You are amazing....

Thank you!

From all your teachers